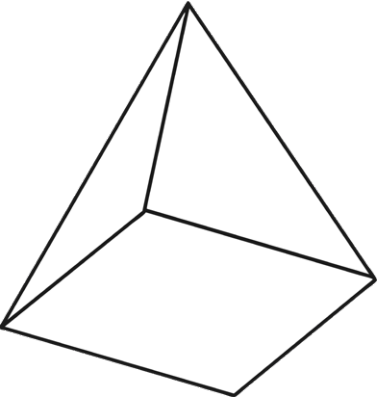
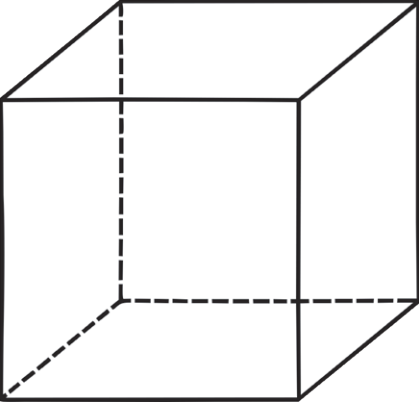
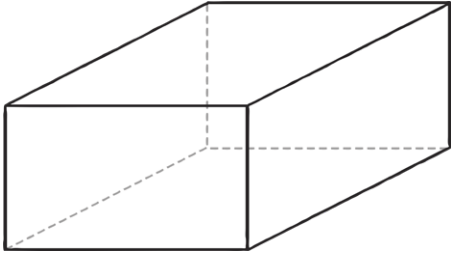


Recognise and Describe 3D Shapes

To name and describe properties of 3D shapes.

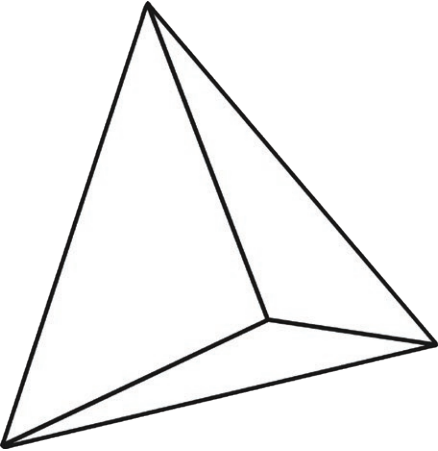
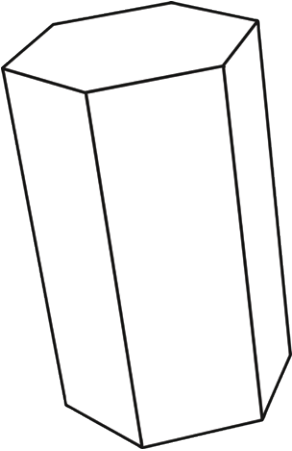
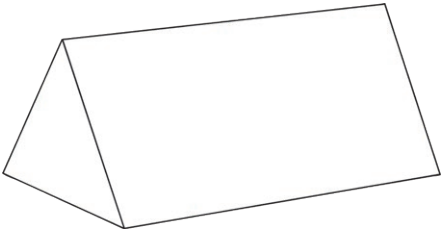


Name of 3D Shape _____	Name of 3D Shape _____	Name of 3D Shape _____
		
<p>It has...</p> <p><input type="checkbox"/> edges</p> <p><input type="checkbox"/> vertices</p> <p><input type="checkbox"/> faces</p>	<p>It has...</p> <p><input type="checkbox"/> edges</p> <p><input type="checkbox"/> vertices</p> <p><input type="checkbox"/> faces</p>	<p>It has...</p> <p><input type="checkbox"/> edges</p> <p><input type="checkbox"/> vertices</p> <p><input type="checkbox"/> faces</p>

Recognise and Describe 3D Shapes

To name and describe properties of 3D shapes.

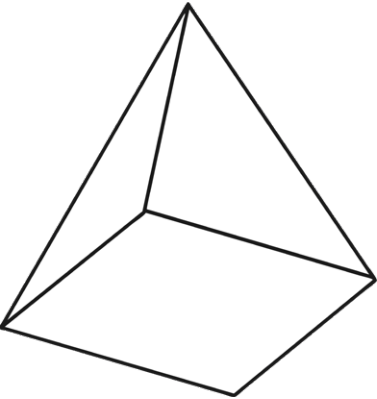
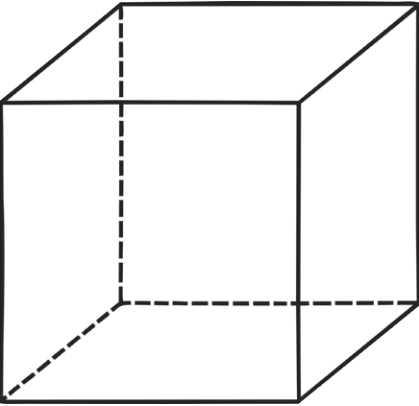
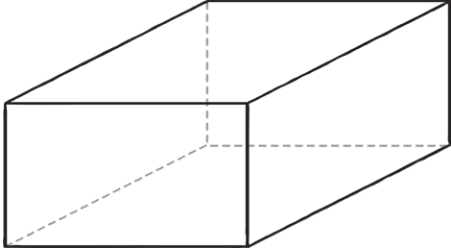


Name of 3D Shape _____	Name of 3D Shape _____	Name of 3D Shape _____
		
<p>It has...</p> <p><input type="checkbox"/> edges</p> <p><input type="checkbox"/> vertices</p> <p><input type="checkbox"/> faces</p>	<p>It has...</p> <p><input type="checkbox"/> edges</p> <p><input type="checkbox"/> vertices</p> <p><input type="checkbox"/> faces</p>	<p>It has...</p> <p><input type="checkbox"/> edges</p> <p><input type="checkbox"/> vertices</p> <p><input type="checkbox"/> faces</p>

Recognise and Describe 3D Shapes

To name and describe properties of 3D shapes.

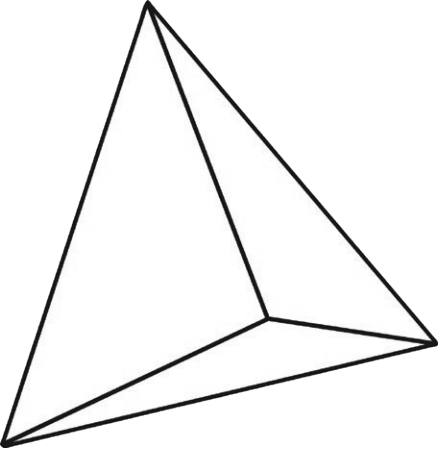
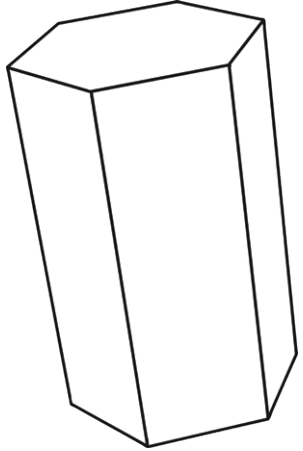
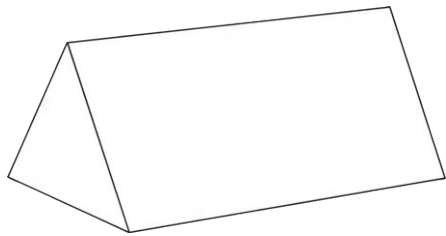


Name of 3D Shape _____	Name of 3D Shape _____	Name of 3D Shape _____
		
<p>It has...</p> <p><input type="checkbox"/> edges</p> <p><input type="checkbox"/> vertices</p> <p><input type="checkbox"/> faces</p>	<p>It has...</p> <p><input type="checkbox"/> edges</p> <p><input type="checkbox"/> vertices</p> <p><input type="checkbox"/> faces</p>	<p>It has...</p> <p><input type="checkbox"/> edges</p> <p><input type="checkbox"/> vertices</p> <p><input type="checkbox"/> faces</p>
<p>Is it a prism?</p> <p>Yes <input type="checkbox"/> No <input type="checkbox"/></p> <p>2D shapes of faces:</p> <p>_____</p> <p>_____</p>	<p>Is it a prism?</p> <p>Yes <input type="checkbox"/> No <input type="checkbox"/></p> <p>2D shapes of faces:</p> <p>_____</p> <p>_____</p>	<p>Is it a prism?</p> <p>Yes <input type="checkbox"/> No <input type="checkbox"/></p> <p>2D shapes of faces:</p> <p>_____</p> <p>_____</p>

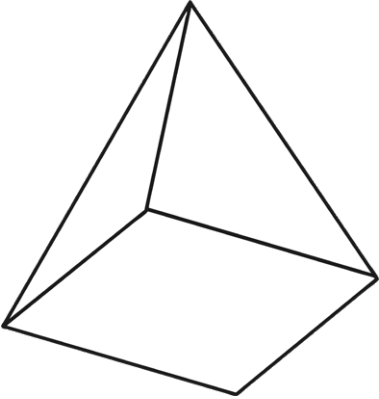
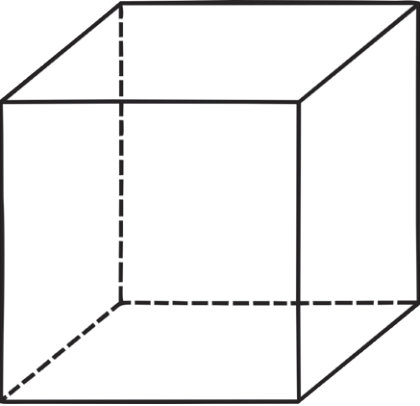
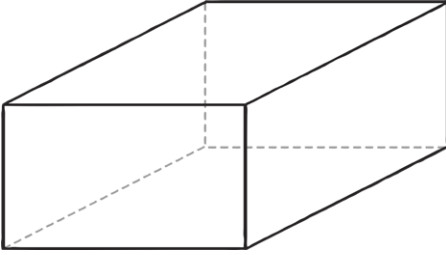
Recognise and Describe 3D Shapes

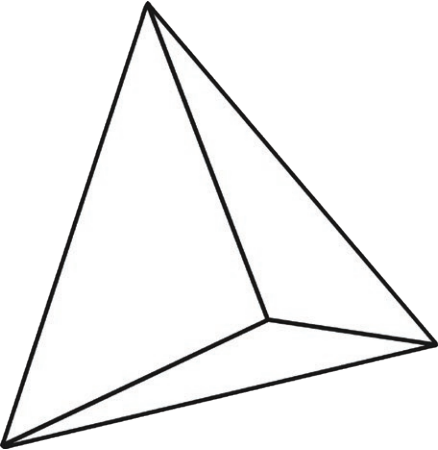
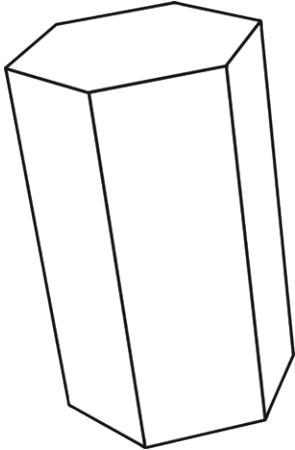
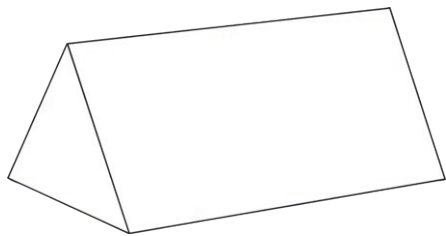
To name and describe properties of 3D shapes.



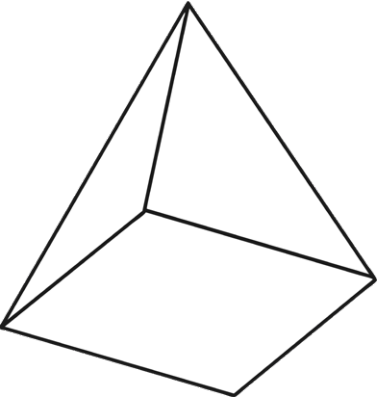
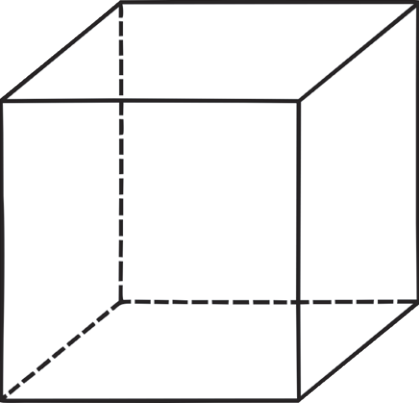
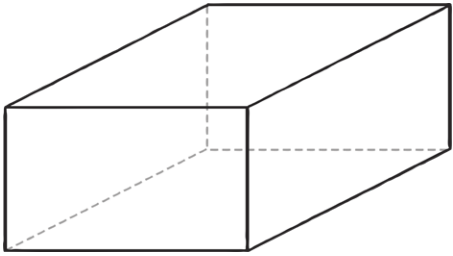
Name of 3D Shape _____	Name of 3D Shape _____	Name of 3D Shape _____
		
<p>It has...</p> <p><input type="checkbox"/> edges</p> <p><input type="checkbox"/> vertices</p> <p><input type="checkbox"/> faces</p>	<p>It has...</p> <p><input type="checkbox"/> edges</p> <p><input type="checkbox"/> vertices</p> <p><input type="checkbox"/> faces</p>	<p>It has...</p> <p><input type="checkbox"/> edges</p> <p><input type="checkbox"/> vertices</p> <p><input type="checkbox"/> faces</p>
<p>Is it a prism?</p> <p>Yes <input type="checkbox"/> No <input type="checkbox"/></p> <p>2D shapes of faces:</p> <p>_____</p> <p>_____</p>	<p>Is it a prism?</p> <p>Yes <input type="checkbox"/> No <input type="checkbox"/></p> <p>2D shapes of faces:</p> <p>_____</p> <p>_____</p>	<p>Is it a prism?</p> <p>Yes <input type="checkbox"/> No <input type="checkbox"/></p> <p>2D shapes of faces:</p> <p>_____</p> <p>_____</p>

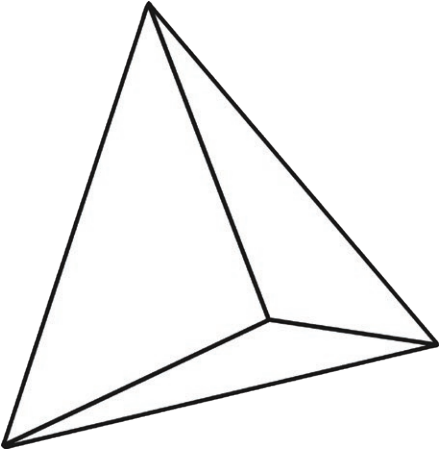
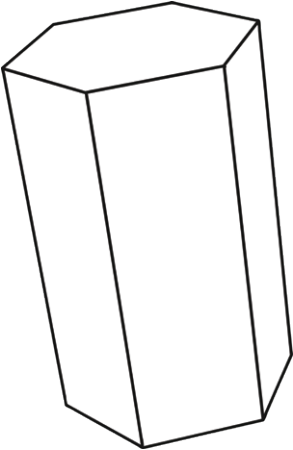
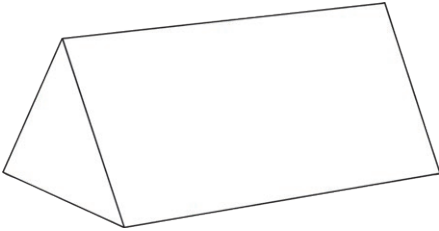
Recognise and Describe 2D Shapes **Answers**

Name of 3D Shape <u>square-based pyramid</u>	Name of 3D Shape <u>cube</u>	Name of 3D Shape <u>cuboid</u>
		
<p>It has...</p> <p>8 edges</p> <p>5 vertices</p> <p>5 faces</p>	<p>It has...</p> <p>12 edges</p> <p>8 vertices</p> <p>6 faces</p>	<p>It has...</p> <p>12 edges</p> <p>8 vertices</p> <p>6 faces</p>

<p>Name of 3D Shape <u>tetrahedron or triangular-based pyramid</u></p>	<p>Name of 3D Shape <u>hexagonal prism</u></p>	<p>Name of 3D Shape <u>triangular prism</u></p>
		
<p>It has...</p> <p>6 edges</p> <p>4 vertices</p> <p>4 faces</p>	<p>It has...</p> <p>18 edges</p> <p>12 vertices</p> <p>8 faces</p>	<p>It has...</p> <p>9 edges</p> <p>6 vertices</p> <p>5 faces</p>

Recognise and Describe 2D Shapes Answers

Name of 3D Shape <u>square-based pyramid</u>	Name of 3D Shape <u>cube</u>	Name of 3D Shape <u>cuboid</u>
		
<p>It has...</p> <p>8 edges</p> <p>5 vertices</p> <p>5 faces</p>	<p>It has...</p> <p>12 edges</p> <p>8 vertices</p> <p>6 faces</p>	<p>It has...</p> <p>12 edges</p> <p>8 vertices</p> <p>6 faces</p>
<p>Is it a prism?</p> <p>Yes <input type="checkbox"/> No <input checked="" type="checkbox"/></p> <p>2D shapes of faces:</p> <p>1 square</p> <p>4 triangles</p>	<p>Is it a prism?</p> <p>Yes <input checked="" type="checkbox"/> No <input type="checkbox"/></p> <p>2D shapes of faces:</p> <p>6 squares</p>	<p>Is it a prism?</p> <p>Yes <input checked="" type="checkbox"/> No <input type="checkbox"/></p> <p>2D shapes of faces:</p> <p>6 rectangles</p>

<p>Name of 3D Shape tetrahedron or triangular-based pyramid</p>	<p>Name of 3D Shape hexagonal prism</p>	<p>Name of 3D Shape triangular prism</p>
		
<p>It has...</p> <p>6 edges</p> <p>4 vertices</p> <p>4 faces</p>	<p>It has...</p> <p>18 edges</p> <p>12 vertices</p> <p>8 faces</p>	<p>It has...</p> <p>9 edges</p> <p>6 vertices</p> <p>5 faces</p>
<p>Is it a prism?</p> <p>Yes <input type="checkbox"/> No <input checked="" type="checkbox"/></p> <p>2D shapes of faces: 4 triangles</p>	<p>Is it a prism?</p> <p>Yes <input checked="" type="checkbox"/> No <input type="checkbox"/></p> <p>2D shapes of faces: 2 hexagons 6 rectangles</p>	<p>Is it a prism?</p> <p>Yes <input checked="" type="checkbox"/> No <input type="checkbox"/></p> <p>2D shapes of faces: 2 triangles 3 rectangles</p>